



N. K. BAGRODIA SECTOR-17, PHASE-II,
GLOBAL SCHOOL DWARKA, NEW DELHI-78
G-mail: nkbglobalschool@gmail.com, Website: www.nkbglobalschool.com

Session: 2024-25

MID TERM (SAMPLE PAPER)

SUBJECT: ENGLISH

CLASS: VI

MAX. MARKS: 60

DURATION: 2.5 Hrs.

General Instructions:

- Read all the questions carefully.
- This paper consists of four sections :
Section A – Reading (15 marks)
Section B – Writing (12 marks)
Section C – Grammar (10 marks)
Section D – Literature (23 marks)
- All the answers must be numbered as in the question paper.
- Mention the section and attempt all the questions of a particular section at one place before going on to the next section.
- Attempt all the questions in a neat handwriting.

SECTION- A READING (15 marks)

Q1. Read the passage given below and answer the questions that follow. (1×8=8 marks)

Abraham Lincoln was born on February 12, 1809, in Hardin County, Kentucky, to Thomas and Nancy Lincoln. When Lincoln was just nine years old, his mother died, and his older sister, Sarah, helped care for him until their father remarried. Lincoln had less than a year of formal schooling but was an avid reader, spending many hours with the Bible and other books. By the time he was 17, he was determined to become a lawyer.

At 21, Lincoln moved to Illinois, where he spent a year working on a farm before taking up a job as a storekeeper. His experiences in these roles helped shape his character and commitment to fairness. Despite his limited formal education, Lincoln studied law on his own and, by 1836, passed the bar exam and became a practicing lawyer. His legal career and growing reputation led to his election to the Illinois legislature as a member of the Whig Party, where he honed his skills in debate and public speaking.

Lincoln was elected the 16th President of the United States in March 1861. Just five weeks into his presidency, the Civil War began with the Confederate attack on Fort Sumter. Lincoln was committed to preserving the Union, and his primary goal during the war was to maintain national unity. In 1863, he issued the Emancipation Proclamation, which declared the freedom of slaves in the Confederate states. This landmark action helped set the stage for the eventual abolition of slavery throughout the country.

The Civil War continued until 1865, and Lincoln's leadership was pivotal in navigating the country through its most challenging period. On April 14, 1865, Lincoln and his wife, Mary Todd Lincoln, attended a play at Ford's Theatre in Washington, D.C. The following evening, Lincoln was assassinated by John Wilkes Booth and died the next morning, April 15, 1865.

During Lincoln's presidency, significant events included the attack on Fort Sumter, the issuance of the Emancipation Proclamation, the passing of the Conscription Act (which established a draft for the Union Army), and his famous Gettysburg Address, delivered in November 1863. Lincoln's leadership and vision played a crucial role in shaping the course of American history.

1. When was Abraham Lincoln born?

- A) February 12, 1807
- B) February 12, 1809
- C) January 1, 1809
- D) March 4, 1809

2. What was Abraham Lincoln's primary goal during the Civil War?

- A) To abolish slavery in the entire United States
- B) To preserve the Union
- C) To expand the Union's territory
- D) To ensure the Confederacy's independence

3. What significant action did Lincoln take in 1863?

- A) He issued the Emancipation Proclamation
- B) He delivered the Gettysburg Address
- C) He signed the Conscription Act
- D) He started the Civil War

4. How did Lincoln's formal education compare to his peers?

- A) He had extensive formal education
- B) He had less than a year of formal schooling
- C) He was privately tutored throughout his childhood
- D) He attended law school

5. Which of the following events occurred first?

- A) The issuance of the Emancipation Proclamation
- B) The attack on Fort Sumter
- C) The Gettysburg Address
- D) The Conscription Act

6. What was the primary purpose of the Gettysburg Address?

- A) To announce the end of the Civil War
- B) To declare the freedom of slaves
- C) To honour the fallen soldiers and reaffirm the Union's purpose
- D) To introduce new military strategies

7. On what date did Abraham Lincoln die?

- A) April 14, 1865
- B) April 15, 1865
- C) April 16, 1865
- D) April 17, 1865

8. What role did Lincoln play in the Illinois legislature?

- A) Speaker of the House
- B) Governor
- C) Representative
- D) Senator

Q2. Read the passage given below and answer the questions that follow:

(1×7=7 marks)

On a bright Saturday morning, Mia and her little brother, Leo, were excited to visit the new park that had just opened in their neighbourhood. Their parents had promised them a fun day out, and the kids could hardly wait to explore the park's many attractions.

When they arrived, the first thing Mia and Leo noticed was the colourful playground. There were swings, slides, and a climbing frame shaped like a castle. Mia quickly ran to the swings, while Leo headed straight for the climbing frame. Mia loved the feeling of the wind in her hair as she soared back and forth. Leo, on the other hand, imagined he was a brave knight climbing up the castle to rescue a dragon.

After some time, their parents suggested they try the park's new picnic area. It was a cozy spot with tables under large trees that provided plenty of shade. Mia and Leo enjoyed sandwiches, fruit, and lemonade, and their parents' shared stories and jokes that made everyone laugh.

Next, they visited the park's pond. It was filled with ducks and turtles. Leo tried to count them, but there were too many! Mia fed the ducks some crumbs from her sandwich. The ducks quacked happily and followed her around. As the afternoon sun started to set, Mia and Leo played a game of tag with some new friends they had met at the park. They ran around, laughing and having a great time. When it was time to go home, they were tired but very happy.

On the way back, Mia and Leo talked about their favourite parts of the day. They agreed that the best part was the picnic and playing with their new friends. As they arrived home, they couldn't wait to tell their family all about their magical day at the park.

1. **What did Mia and Leo notice first when they arrived at the park?**

- A) The picnic area
- B) The colourful playground
- C) The pond with ducks
- D) The new friends they made

2. **What did Leo imagine while climbing the climbing frame?**

- A) That he was a knight rescuing a dragon
- B) That he was a circus performer
- C) That he was a superhero
- D) That he was a pirate on a ship

3. **Where did Mia and Leo have their picnic?**

- A) Near the pond
- B) At a playground table
- C) In the cozy picnic area under trees
- D) On the grass by the swings

4. **What did Mia do at the pond?**

- A) Counted the ducks and turtles
- B) Fed the ducks crumbs from her sandwich
- C) Played tag with other children
- D) Took pictures of the turtles

5. **How did Mia and Leo feel about their day at the park?**

- A) They were disappointed
- B) They were tired but very happy
- C) They were bored
- D) They were hungry

6. **What did Mia and Leo do in the afternoon?**

- A) Went home early
- B) Played a game of tag with new friends
- C) Took a nap under the trees
- D) Visited the playground again

7. **What did Mia and Leo agree was the best part of their day?**

- A) The playground
- B) The pond
- C) The picnic and playing with new friends
- D) The ride home

SECTION- B WRITING (12 marks)

Q3. You are Sumit/Smriti, Head Boy/Head Girl of Delhi Public School. Write a notice for your school notice board in not more than 50 words informing the students about a trip to World of Wonder Water Park. Include all the necessary information. (5 marks)

OR

You are Khushi/Kunal, School Captain of Mother Modern School, Rohini. Write a notice for your school notice board in not more than 50 words informing the students about an Inter-House Dance Competition to be held on 25th September.

Q4. Your local community has seen an increase in littering around public parks and streets. There is a proposal to set up more trash bins and organize regular clean-up events, but some community members believe this is unnecessary. Write a letter to the editor of the local newspaper to support the proposal and highlight the importance of keeping the community clean. (Word Limit : 150 word) (7 marks)

OR

Your town has a beautiful old library that is in danger of being closed and replaced with a new shopping mall. Many residents believe that preserving the library is important for the community. Write a letter to the editor of the local newspaper to argue for saving the library and suggest ways to fund its maintenance. (Word Limit : 150 words)

SECTION- C GRAMMAR (10 marks)

Q5. Read the conversation given below in direct speech and complete the paragraph by transforming the dialogues into indirect speech. (0.5x3=1.5 marks)

Shopkeeper: *May I help you?*

Customer: *Yes.*

Shopkeeper: *What do you want to buy?*

Customer: *I want to buy a pair of sports shoes.*

Shopkeeper: *I have just the right pair for you. Try these please.*

Customer: *Oh, these shoes are so nice. I'll buy them.*

The shopkeeper asked the customer if (a) The customer replied in the affirmative. The shopkeeper then asked the customer what he wanted to buy. The customer said that he wanted a pair of sports shoes. The shopkeeper said that he had just the (b) requested him to try them. The customer said that the shoes were very nice and that he (c)

Q6. Transform the sentences as mentioned in the bracket : (0.5x4=2marks)

- a. The students studied hard for the final exams. (Present Perfect Tense)
- b. My parents will host a party at home. (Past Continuous Tense)
- c. The participants are preparing for the tournament. (Simple Future Tense)
- d. They will visit their grandparents next month. (Future Perfect Tense)

Q7. Identify the incorrect preposition and rewrite the sentence with correct preposition. (0.5x3=1.5 marks)

Sentence	Error	Correction
a. We had reached the venue on 10 am.		
b. The boys of my building go over school together.		
c. The tourists were walking through the beach.		

Q8 Read the paragraph below and fill in the blanks with the correct form of the verb in parentheses to ensure subject-verb agreement. (0.5x10=5 marks)

In the quiet town of Greenfield, there (1) _____ (be) a small bakery that everyone (2) _____ (love). Every morning, the baker and his assistant (3) _____ (prepare) fresh bread and pastries. The aroma of the baking goods (4) _____ (fill) the air, and people (5) _____ (come) from all around to buy them. The baker often (6) _____ (share) stories with his customers while they (7) _____ (wait) in line. Sometimes, children (8) _____ (ask) for cookies, and the baker always (9) _____ (smile) and give them a treat. The bakery (10) _____ (become) a beloved part of the community because of its delicious offerings and friendly atmosphere.

SECTION- D LITERATURE (23 marks)

Q9. Answer the following questions. (1x3=3 marks)

“And now, Albert, blessed brother of mine, now it is your turn. Now you can go to Nuremberg to pursue your dream and I will take care of you.”

- a. Who is the speaker of these lines?
- b. Why did he ask Albert to go to Nuremberg?
- c. How will he take care of Albert as per these lines?

OR

The name of the child and the tone of his mother's voice awakened a train of recollections in Rip Van Winkle's mind.

- a. What was the name of the child ?
- b. What did Rip Van Winkle recollect?
- c. Explain the phrase, 'a train of recollections'.

Q10. Read the lines given below and answer the questions that follow. (1x2=2 marks)

I will go out until the day, until the morning break--

Out to the wind's untainted kiss, the water's clean caress;

I will forget my ankle-ring and snap my picket stake.

I will revisit my lost loves, and playmates masterless!

- a. Why does the speaker want to go masterless to revisit his playmates ?
- b. 'Out to the winds' untainted kiss, the waters' clean caress'. Explain the meaning of this line.

Q11. Read the lines given below and answer the questions that follow.

(1×2=2 marks)

When Mary and Susan and Emily

With their sweet round mouths sing "Ha, ha he!"

When the painted birds laugh in the shade,

Where our table with cherries and nuts is spread:

Come live, and be merry, and join with me,

To sing the sweet chorus of "Ha, ha, he!"

- a. Name the poem and the poet.
- b. Who are the children and what do they sing?

Q12. Answer ANY 6 questions in 30-40 words.

(2×6=12marks)

- a. Why did the granddaughter marry Kishanlal at the end? How did he help her?
- b. What was the experiment that Helen conducted with her friends and their husbands?
- c. How did Helen demonstrated that most people blessed with sight do not really see?
- d. Why was Hughie first angry and then highly embarrassed after he met Alan that night?
- e. What kind of a person was Baron Hausberg?
- f. How did Albert help his brother for studying at the academy?
- g. Describe the stranger whom Rip met on the mountain.

Q13. Answer ANY 1 question in 60-70 words.

(1×4=4 marks)

What do you think about the bond of the two brothers? Explain in detail taking examples from their lives.

OR

Have you heard of the term 'infectious laughter'? What do you think is meant by the phrase? Explain with the help of an example.



सत्र: 2024-25

अर्धवार्षिक परीक्षा प्रश्न-पत्र

विषय : हिन्दी

अधिकतम अंक: 60

कक्षा : VI

समय अवधि : 2:30 घंटे

सामान्य निर्देश:

1. निम्नलिखित निर्देशों को बहुत सावधानी से पढ़िए और उनका पालन कीजिए।
2. प्रश्नपत्र में दो खंड हैं - खंड 'अ' और 'ब'
3. खंड 'अ' में उपप्रश्नों सहित वस्तुपरक प्रश्न पूछे गए हैं, दिए गए निर्देशों का पालन करते हुए प्रश्नों के उत्तर दीजिए।
4. खंड 'ब' में वर्णनात्मक प्रश्न पूछे गए हैं।
5. यथासंभव दोनों खंडों के प्रश्नों के उत्तर क्रमशः लिखिए।

खण्ड- 'अ' (वस्तुनिष्ठ प्रश्न)

प्रश्न 1. निम्नलिखित अपठित गद्यांश को ध्यानपूर्वक पढ़कर पूछे गए प्रश्नों के उत्तर सही विकल्प चुनें कर दें - (1X5=5)

विद्यार्थी जीवन ही वह समय है जिसमें बच्चों के चरित्र, व्यवहार, आचरण को जैसा चाहे, वैसा रूप दिया जा सकता है यह अवस्था भावी वृक्ष की उस कोमल शाखा की भाँति है, जिसे जिधर चाहो मोड़ा जा सकता है। पूर्णतः विकसित शाखाओं को मोड़ना संभव नहीं। उन्हें मोड़ने का प्रयास करने पर वे टूट तो सकती हैं पर मुड़ नहीं सकतीं। छात्रावस्था श्वेत चादर की तरह होती है, जिसमें जैसा प्रभाव डालना हो, डाला जा सकता है। सफेद चादर पर एक रंग जो चढ़ गया, सो चढ़ गया, फिर से वह पूर्वावस्था को प्राप्त नहीं हो सकता है। इसीलिए प्राचीन काल से ही विद्यार्थी जीवन के महत्त्व को स्वीकार किया गया है। इसी अवस्था से सुसंस्कार और सद्वृत्ति पोषित की जा सकती है। इसीलिए प्राचीन समय में बालक को घर से दूर गुरुकुल में रहकर कठोर अनुशासनका पालन करना होता था।

क) व्यवहार को सुधारने का सर्वोत्तम समय क्या होता है?

- i) प्रौढ़ावस्था ii) युवावस्था iii) वृद्धावस्था iv) छात्रावस्था

ख) छात्रावस्था की उपयुक्त तुलना किससे की गई है?

- i) विकसित वृक्ष से iii) अविकसित वृक्ष से
ii) सफेद चादर से iv) वृक्ष की विकसित शाखा से

ग) छात्रों को गुरुकुल में छोड़ने का उद्देश्य क्या था?

i) कठोर अनुशासन के लिए

ii) अच्छे संस्कार विकसित करने के लिए

iii) घर से दूर रखने के लिए

iv) इनमें से कोई नहीं

घ) 'विद्यार्थी' शब्द का उचित वर्ण विच्छेद क्या होगा?

i) व्+इ+द्+य्+आ+र्+थ्+ ई

ii) व्+इ+द्+य्+आ+र्+अ+थ्+ई

iii) व्+इ+द्+य्+आ+र्+थ्+ई

iv) व्+इ+द्+य्+अ+र्+थ्+ई

ङ) निम्नलिखित शब्द समूहों में से 'गुरुकुल' का उचित पर्यायवाची शब्द समूह कौन सा है?

i) विद्यालय, विद्यमान, विद्यापीठ

ii) विद्यालाभ, पाठशाला, विद्यापीठ

iii) विद्यालय, पाठशाला, विद्यापीठ

iv) विद्यालय, पाठशाला, विज्ञानशाला

प्रश्न 2. निम्नलिखित अपठित गद्यांश को ध्यानपूर्वक पढ़कर पूछे गए प्रश्नों के उत्तर सही विकल्प चुनें कर दें -

(1X5=5)

"सच्चा उत्साह वही होता है जो मनुष्य को कार्य करने के लिए प्रेरणा देता है। मनुष्य किसी भी कारणवश जब किसी के कष्ट को दूर करने का संकल्प करता है, तब जिस सुख को वह अनुभव करता है, वह सुख विशेष रूप से प्रेरणा देनेवाला होता है। जिस भी कार्य को करने के लिए मनुष्य में कष्ट, दुःख या हानि को सहन करने की ताकत आती है, उन सबसे उत्पन्न आनंद ही उत्साह कहलाता है। उदाहरण के लिए दान देनेवाला व्यक्ति निश्चय ही अपने भीतर एक विशेष साहस रखता है और वह है धन-त्याग का साहस। यही त्याग यदि मनुष्य प्रसन्नता के साथ करता है तो उत्साह से किया गया दान कहा जाएगा उत्साह आनंद और साहस का मिला-जुला रूप है। उत्साह में किसी-न-किसी वस्तु पर ध्यान अवश्य केंद्रित होता है। वह चाहे कर्म पर, चाहे कर्म के फल पर और चाहे व्यक्ति या वस्तु पर हो। इन्हीं के आधार पर कर्म करने में आनंद मिलता है।"

क) सच्चे वीर वे होते हैं-

i) जो फल पाने के लिए उत्साह दिखाते हैं।

ii) जो कर्म भाव से उत्साह दिखाते हैं।

iii) जो निष्काम भाव से उत्साह दिखाते हैं।

iv) जो आनंद विनोद के लिए उत्साह दिखाते हैं।

ख) किस प्रकार का सुख विशेष रूप से आनंद देता है?

i) दूसरों के कष्टों को दूर करने का सुख

ii) त्याग करते रहने का सुख

iii) धन अर्जित करने का सुख

iv) उपर्युक्त कोई नहीं

ग) 'उत्साह' शब्द निम्नलिखित संज्ञा के भेदों में से किस भेद से संबंध रखता है ?

- i) व्यक्तिवाचक संज्ञा iii) भाववाचक संज्ञा
ii) द्रव्यवाचक संज्ञा iv) समूहवाचक संज्ञा

घ) उत्साह का प्रमुख लक्षण क्या है?

- i) जोश ii) साहस iii) आनंद iv) आनंद और साहस

ङ) 'आनंद' शब्द का पर्यायवाची है-

- i) प्रसन्नता ii) दुख iii) विलाप iv) क्रोध

व्याकरण पर आधारित प्रश्नों के उत्तर सही विकल्प चुन कर दें -

प्रश्न 3- 'कारक' पर आधारित प्रश्नों में से किन्हीं तीन प्रश्नों के उत्तर दें

(1X3=3)

क) निम्नलिखित में से कौन सा वाक्य 'संप्रदान' कारक का नहीं है?

- i) वह माँ के लिए साड़ी लाया। iii) सेठ जी ने गरीबों में कम्बल बाँटे।
ii) माँ ने मोहन को भोजन दिया। iv) दोनों मित्रों में लड़ाई है।

ख) निम्नलिखित में से कौन सा वाक्य 'संबंध' कारक का है?

- i) बच्चों! उधर मत भागो। iii) चिड़िया पेड़ पर बैठी है।
ii) छोटा बच्चा बाघ से डर गया। iv) तुम्हारे घर में कौन-कौन है?

ग) "राम खेत पर काम कर रहा है।" वाक्य में 'खेत' कौन से कारक का उदाहरण है?

- i) अधिकरण कारक ii) करण कारक iii) सम्प्रदान कारक iv) संबंध कारक

घ) "सीता ने फूलों से माला बनाई।" इस वाक्य में 'फूलों' कौन से कारक का उदाहरण है?

- i) कर्ता कारक ii) करण कारक iii) सम्प्रदान कारक iv) अधिकरण कारक

प्रश्न 4- 'सर्वनाम' पर आधारित किन्हीं तीन प्रश्नों के उत्तर दें -

(1X3=3)

क) "यह मेरी किताब है।" वाक्य में 'यह' कौन सा सर्वनाम है?

- i) संबंधवाचक सर्वनाम ii) निश्चयवाचक सर्वनाम iii) अनिश्चितवाचक सर्वनाम

ख) निम्नलिखित में 'अनिश्चितवाचक सर्वनाम' कौन से वाक्य में निहित है?

- i) वहाँ कोई बैठा है। iii) यह किताब मेरी है।
ii) सुबह घर कौन आया था ? iv) उसका खिलौना टूट गया।

ग) "मैं खाना खा चुका हूँ।" वाक्य में 'मैं' कौन सा सर्वनाम है?

- i) प्रश्नवाचक सर्वनाम ii) पुरुषवाचक सर्वनाम iii) संबंधवाचक सर्वनाम

घ) निम्नलिखित में 'संबंधवाचक सर्वनाम' कौन से वाक्य में नहीं है?

- i) जो चाहिए वही मिलेगा। iii) ये वो साड़ी है जो माँ ने दी थी।
ii) कटोरी में दही रखा है। iv) जिसने मेहनत की फलता उसे मिला।

प्रश्न 5- 'विशेषण' पर आधारित किन्हीं तीन प्रश्नों के उत्तर दें -

(1X3=3)

क) "कोई लड़का आया है।" वाक्य में 'कोई' कौन सा विशेषण है?

i) संख्यावाचक विशेषण ii) गुणवाचक विशेषण iii) सार्वनामिक विशेषण

ख) "दस किलो चीनी कनस्तर में रखी है।" वाक्य में 'दस किलो' कौन सा विशेषण है?

i) संख्यावाचक विशेषण ii) गुणवाचक विशेषण iii) परिमाणवाचक विशेषण

ग) निम्नलिखित वाक्यों में कौन सा संख्यावाचक विशेषण नहीं हैं-

i) हमारी कक्षा में तीस विद्यार्थी हैं। iii) आज विहान का बारहवाँ जन्मदिन है।

ii) भैया! दो दर्जन केले देना। iv) आज सोनिया ने कम खाना खाया।

घ) निम्नलिखित वाक्यों में कौन सा सार्वनामिक विशेषण है-

i) तुम्हारा भाई कहाँ रहता है? iii) सारी दाल गिर गई।

ii) लड़कों ने परीक्षा नहीं दी। iv) शादी के लिए बहुत सामान खरीदना है।

प्रश्न 6- 'शब्द विचार' पर आधारित किन्हीं दो प्रश्नों के उत्तर दें -

(1X2=2)

क) "घर" शब्द उत्पत्ति के आधार पर कौन से शब्द के अंतर्गत आता है?

i) तत्सम ii) तद्भव iii) देशज iv) विदेशी

ख) निम्नलिखित में विदेशी शब्द समूह कौन सा है?

i) चाकू, कैंची, रेल, किशमिश iii) गृह, कैंची, रेल, किशमिश

ii) चाकू, कैंची, निद्रा, किशमिश iv) चाकू, मुख, रेल, किशमिश

ग) निम्नलिखित में तद्भव शब्द समूह कौन सा है?

i) आँसू, गाँव, मयूर, सपना iii) आँसू, गाँव, मोर, स्वप्न

ii) अश्रु, गाँव, मोर, सपना iv) आँसू, गाँव, मोर, सपना

प्रश्न 7- 'उपसर्ग' पर आधारित किन्हीं दो प्रश्नों के उत्तर दें -

(1X2=2)

क) "परिवर्तन" शब्द में मूल शब्द के साथ जुड़े उचित उपसर्ग को चुनें?

i) प ii) परी iii) परि iv) पर्

ख) जो शब्द "निर्" उपसर्ग से नहीं बना है?

i) निर्बल ii) निर्धन iii) निराकार iv) निशान

ग) निम्नलिखित में कौन सा समूह उपसर्गों सहित पूर्ण रूप से सही है?

i) ला - लाइलाज, लालच, लापरवाह iii) पूरा - पुराना, पुरातत्व, पुरातन

ii) अध - अधखिला, अधमरा, अधपका iv) बद - बदसूरत, बदनाम, बंदूक

प्रश्न 8- 'प्रत्यय' पर आधारित किन्हीं दो प्रश्नों के उत्तर दें -

(1X2=2)

क) "अपनत्व" शब्द जुड़े उचित प्रत्यय को चुनें?

- i) तव ii) त्व iii) नत्व iv) व

ख) जो शब्द "आवट" प्रत्यय से नहीं बना है?

- i) खिलावट ii) दिखावट iii) बुलावट iv) थकावट

ग) निम्नलिखित में कौन सा समूह प्रत्यय सहित पूर्ण रूप से सही है?

- i) आलु - कृपालु, चालु, दयालु iii) आनी - पानी, देवरानी, सेठानी
ii) नी - चाँदनी, नथनी, पुरानी iv) आहट - घबराहट, चिकनाहट, चिल्लाहट

पाठ्य पुस्तक पर आधारित प्रश्नों के उत्तर सही विकल्प चुन कर दें -

प्रश्न 9- निम्नलिखित पठित गद्यांश के आधार पर किन्हीं पाँच प्रश्नों के सही उत्तर दें- (1X5=5)

आज मैं जहाँ भी जाता हूँ बच्चे व बूढ़े मुझे घेर लेते हैं और मुझसे मेरी सफलता का राज़ जानना चाहते हैं। मेरे पास सफलता का कोई गुरुमंत्र तो है नहीं। हर किसी से यही कहता कि लगन, साधना और खेल भावना ही सफलता के सबसे बड़े मन्त्र हैं।

(क) मेजर ने अपने सर पर पड़ी हॉकी का बदला कैसे लिया?

- i) खिलाड़ी के पैर पर हॉकी मार कर iii) मारने वाले की शिकायत दर्ज करा कर
ii) छः गोल करके iv) चार गोल करके

ख) मेजर ध्यानचंद के बारे में कौन सी बात गलत है ?

- i) हॉकी के जादूगर ii) जीत के पीछे दौड़ने वाले iii) खेल भावना रखने वाले

ग) उपर्युक्त पंक्तियाँ किस पाठ से ली गई हैं और इसके लेखक कौन हैं सही विकल्प चुनें

- i) गोल - मेजर ध्यानचंद iii) गोल - बदरीनाथ भट्ट
ii) हार की जीत - बाबा भारती iv) हार की जीत - सुदर्शन

घ) प्रस्तुत पंक्तियों के पाठ की विधा क्या है ?

- i) संस्मरण ii) नाटक iii) कहानी iv) आत्मकथा

ङ) बच्चों व बूढ़ों के उनसे उनकी सफलता का राज़ पूछने पर मेजर क्या ज़वाब देते थे?

- i) "लगन, साधन और खेल भावना ही सफलता के सबसे बड़े मन्त्र हैं।"
ii) "लगन, साधना और खेल भावना ही सफलता के सबसे बड़े मन्त्र हैं ।"
iii) "लगन, साधना और खेल जीतने की ज़िद ही सफलता के सबसे बड़े मन्त्र हैं ।"

प्रश्न 10- निम्नलिखित पठित पद्यांश के आधार पर किन्हीं चार प्रश्नों के सही उत्तर दें- (1X4=4)

ऊँचा खड़ा हिमालय, आकाश चूमता है,
नीचे चरण तले झुक, नित सिंधु झूमता है।

गंगा यमुन त्रिवेणी, नदियाँ लहर रही हैं,
जगमग छटा निराली, पग पग छहर रही हैं।
वह पुण्य-भूमि मेरी, वह स्वर्ण- भूमि मेरी ।
वह जन्मभूमि मेरी।

क) हिमालय पर्वत भारत की किस दिशा में स्थित है

i) पूर्व दिशा ii) उत्तर दिशा iii) दक्षिण दिशा iv) पश्चिम दिशा

ख) भारत में किन तीन पवित्र नदियों का अनोखा संगम प्रयाग में होता है?

i) गंगा, यमुना, कावेरी iii) गंगा, यमुना, ब्रह्मपुत्र
ii) गंगा, सिंधु, यमुना iv) गंगा, यमुना, सरस्वती

ग) "स्वर्ण" शब्द का अर्थ नहीं है ?

i) सोना ii) पवित्र iii) कनक iv) कुंदन

घ) भारत का विशाल सागर हिंद महासागर भारत की किस दिशा में स्थित है?

i) पूर्व दिशा ii) उत्तर दिशा iii) दक्षिण दिशा iv) पश्चिम दिशा

खण्ड- 'ब' (वर्णनात्मक प्रश्न)

प्रश्न 11. पाठ्य पुस्तक के पर आधारित निम्नलिखित प्रश्नों में से किन्हीं दो प्रश्नों के उत्तर विस्तार से दें - (3X2=6)

- क) बाबा भारती और खड्ग सिंह के बीच हुए संवादों को अंकित करते हुए अपने शब्दों में लिखें?
ख) मेजर ने हॉकी के मैदान में लगी अपने सर की चोट का बदला कैसे और क्यों लिया?
ग) सुलतान पर बाबा भारती किन तरीकों से अपना प्यार लुटाते थे?

प्रश्न 12. पाठ्य पुस्तक की कविता मातृभूमि पर आधारित निम्नलिखित प्रश्नों में से किन्हीं दो प्रश्नों के उत्तर विस्तार से दें - (3X2=6)

- क) कवि ने भारत की भूमि को युद्धभूमि और बुद्धभूमि क्यों कहा है?
ख) निम्नलिखित पंक्तियों का भावार्थ अपने शब्दों में लिखें?
"झरने अनेक झरते, जिसकी पहाड़ियों में,
चिड़ियाँ चहक रही हैं, हो मस्त झाड़ियों में।"
ग) शीतल एवं सुगंधित हवाएँ कहाँ से आती हैं और इसके माध्यम से कवि ने भारत की क्या और कैसी विशेषताओं का वर्णन किया है?

प्रश्न 13. किसी एक विषय पर अनुच्छेद लेखन करें -

(5 अंक)

- वन और पर्यावरण का सम्बन्ध (संकेत बिन्दु :- वन प्रदूषण-निवारण में सहायक, वनों की उपयोगिता, वन संरक्षण की आवश्यकता, वन संरक्षण के उपाय)
- कम्प्यूटर (संकेत बिन्दु :- कम्प्यूटर की आवश्यकता, कम्प्यूटर की उपयोगिता, कम्प्यूटर की लोकप्रियता, कम्प्यूटर का विभिन्न क्षेत्रों में प्रयोग)
- प्रातःकालीन भ्रमण (संकेत बिन्दु :- प्रकृति से संपर्क, शारीरिक व्यायाम, स्वस्थ तन में स्वस्थ मन का वास)

प्रश्न 14. आपकी चचेरी बहन की सगाई हो रही है और आपको जयपुर के समारोह में शामिल होना है।

प्रधानाचार्या को दो दिन की छुट्टी के लिए प्रार्थना पत्र लिखिए।

(5 अंक)

अथवा

- पढ़ाई का सत्र प्रारंभ हो चुका है किन्तु बाज़ार में पाठ्य-पुस्तकें उपलब्ध नहीं हैं। इस समस्या को उठाते हुए किसी दैनिक पत्र के संपादक को पत्र लिखिए।

प्रश्न 15. नीचे दिए गए चित्र को देखते हुए शीर्षक एवं शिक्षा सहित कम से कम 70-80 शब्दों में

चित्र वर्णन करें :-

(4 अंक)





General Instructions:

- Read all the questions carefully.
- This paper is divided into 4 sections. i.e section A, B, C and D
- Marks are indicated against every question.
- Attempt all parts of the question together.

Section-A (10 Marks)
Compréhension Ecrite

1. Lisez le passage et répondez aux questions suivantes.

Bonjour ! Je m'appelle Chloé. Je suis étudiante. J'étudie dans une grande école. J'ai treize ans. J'habite avec ma famille. Mon père est journaliste et ma mère est femme au foyer. Ma sœur, Emilie a cinq ans. Elle est très mignonne. J'aime faire des sports. Mon sport favori est le badminton. Le soir, je vais au parc pour jouer avec mes amis. Quelquefois je fais une promenade. Le week-end, je préfère passer du temps avec ma famille.

1. Trouvez du texte. (3)

- (a) Un verbe infinitif _____
(b) Une expression avec Faire _____
(c) Le contraire de «petite» _____

2. Complétez avec un/des mot(s) du texte.

- (a) Un _____ travaille dans une agence de journal.
(b) Il y a seulement trois membres dans ma _____
(c) La sœur de Catherine est très _____

3. Dites «vrai» ou «faux».

- (a) La mère ne travaille pas.
(b) Emilie étudie dans une grande école.

4. Répondez aux questions suivantes

- (a) Que fait le père de Chloé ?
- (b) Quel âge a Emilie ?

Section-B (10 Marks)

Expression Ecrite

1. Décrivez une personne de votre choix en 10-12 phrases :

2. Mettez le dialogue en ordre.

- Et ton frère ?
- Mon frère est journaliste.
- Que fait ta sœur ?
- Il est professeur.
- Elle est coiffeuse.
- Ma sœur est mannequin. Et ta sœur ?

3. Complétez avec les mots donnés.

La _____ est une saison des fleurs. Les _____ chantent et le _____ ciel est bleu. Les arbres ont des _____ vertes: Il fait _____. J'aime cette _____.

Section C (30 Marks)

(Grammaire)

1. Conjuguez les verbes suivants.

- 1. Jeter les magazines. (affirmatif)
- 2. Préférer la couleur noire. (négatif)

2. Conjuguez les verbes suivantes :

- 1. Les Legrand _____ une belle villa à campagne. (avoir)
- 2. M. Depardieu _____ du sport tous les jours. (faire)
- 3. NOUS _____ le petit-déjeuner. (manger)
- 4. Les élèves _____ vite. (grandir)
- 5. Elle _____ le chien. (appeler)
- 6. Ma mère et moi _____ les vêtements dans l'armoire. (placer)
- 7. Nous _____ gros. (être)
- 8. Elles _____ des papiers par la fenêtre. (jeter)
- 9. Ils _____ à l'école. (ne pas aller)
- 10. Vous _____ la queue. (ne pas faire)

3. Mettez les phrases au pluriel.

- 1. L'oiseau est sur le mur.
- 2. Il ya un chacal dans la forêt.
- 3. L'œil de Sophie est grand.
- 4. J'appelle le garçon belge.
- 5. j'achète de l'eau minérale.

4 Changez ces phrases au féminin.

1. Cest un grand homme gentil.
2. Le joli garçon est mexicain.
3. Le père de mon ami est avocat.
4. C'est un haut mur.
5. Vous mangez des sandwichs.

5. Mettez au négatif.

1. Elle a une belle maison.
2. Nous sommes et petits et minces.
3. il aime la couleur blanches.
4. C'est un Haut mur.
5. Vous mangez les sandwiches.

6. Récrivez les nationalités et les professions.

1. Jean-Pierre est _____ (singer) ; il est _____ (Spanish).
2. Mme Lapierre est _____ (doctor) ; elle est _____ (Italian).
3. Pauline et Caroline sont _____ (actress) ; elles sont _____ (French).

7. Posez la question.

1. C'est un tigre.
2. Ce sont des étudiants.

8. Mettez les accents convenables,

1. hopital
2. regle
3. bete
4. ecole

9. Remplissez les blancs avec article défini ou indéfini.

1. C'est _____ enfant ; c'est _____ de M. lacroix.
2. Il y a _____ grand renard derrière _____ arbre.
3. Nous achetons _____ fruits pour _____ enfants

10. Complétez avec les pronoms sujets.

- a. _____ manges un croissant.
- b. _____ font du violon.
- c. _____ êtes italiens.
- d. _____ appelle la serveuse.

**Section-D (10 Marks)
Culture et Civilisation**

1. Reliez les colonnes.

- | | |
|------------------------|----------------------------|
| 1. La Marseillaise | (a) un vin français |
| 2. Le 14 juillet | (b) tricolore |
| 3. L'Océan Atlantique | (c) 'hymne national |
| 4. Le bordeaux | (d) un fleuve français |
| 5. Le drapeau français | (e) à l'ouest de la France |
| 6. La Loire | (f) la fête nationale |

2. Nommez les suivants.

1. Deux montagnes en France _____
2. Deux courtières français _____
3. deux pays voisins de la France. _____

3. Complétez selon le sens.

1. La _____ sépare la France de l' Angleterre.
2. Le _____ est le plus ancien pont à Paris.
3. _____ est l'épicentre de la mode.
4. Paris est aussi appelée la _____

2. Dites «vrai» ou «faux»,

1. Le franc et la monnaie en circulation en France.
2. La France est très connue pour ses parfums et ses fromages.



**N. K. BAGRODIA
GLOBAL SCHOOL**

SECTOR-17, PHASE-II,
DWARKA, NEW DELHI-78

G-mail: nkbglobalschool@gmail.com, Website: www.nkbglobalschool.com

**Session: 2024-25
MID TERM**

MID TERM SAMPLE PAPER

SUBJECT: SANSKRIT

MAX. MARKS: 60

CLASS: VI

DURATION: 2.5Hrs

सामान्य निर्देशाः-

- कृपया सम्यक्तया परीक्षणं कुर्वन्तु यत् अस्मिन् प्रश्नपत्रे 14 प्रश्नाः सन्ति।
- उत्तर लेखनात् पूर्व प्रश्नस्य क्रमाङ्कः अवश्यं लेखनीयः।
- प्रश्नसङ्ख्या प्रश्नपत्रानुसारम् अवश्यमेव लेखनीया।
- सर्वेषां प्रश्नानाम् उत्तराणि संस्कृतेन लेखनीयानि।
- प्रश्नानां निर्देशाः ध्यानेन अवश्यं पठनीयाः।

खण्ड (क) अपठित-अवबोधनम्

प्र.1 अधोलिखितम् गद्यांशं पठित्वा उत्तराणि लिखत-

(10)

अद्य वने पशु महोत्सवः अस्ति। मञ्चस्य उपरि सिंहः तिष्ठति। आकाशे सर्वत्र मेघाः सन्ति। मेघान् दृष्ट्वा मयूराः वृक्षाणाम् अधः नृत्यन्ति। पशवः इतस्ततः भ्रमन्ति। सर्पः कोटरात् बहिः आगच्छति। सर्पात् भीताः पशवः कोलाहलं कुर्वन्ति। कोलाहलं श्रुत्वा सिंहः उच्चैः गर्जति आदिशति च-भोः! कोलाहलं मा कुरुत। शृणुत-अस्माकं जीवनं वृक्षान् विना असम्भवम्। वृक्षाः फलानि छायां च दत्त्वा अस्मान् उपकुर्वन्ति। अतः अस्माभिः वने नूनं वृक्षाः रक्षणीयाः। वृक्षाः देववत् जनान् रक्षन्ति। ते धरायाः उपरि साक्षात् देवाः भवन्ति। तेषां जन्म एव परार्थाय भवति। तान् प्रति कृतं पापम् अक्षम्यं भवति। अतः ध्यातव्यम्-‘वृक्षदेवो भव’।

(I) एकपदेन उत्तरत (केवलं प्रश्नद्वयमेव)।

(i) मेघाः कुत्र सन्ति?

(ii) सर्पात् भीताः के आसन् ?

(iii) अस्माभिः वने के रक्षणीयाः?

(II) पूर्णवाक्येन उत्तरत।

(i) सिंहः किम् आदिशति?

(ii) मेघान् दृष्ट्वा के कुत्र च नृत्यन्ति?

(iii) किम् ध्यातव्यम्?

(III) उपरिलिखितस्य अनुच्छेदस्य कृते समुचितं शीर्षकं लिखत।

(IV) भाषिककार्यम्

(i) ‘अद्य पशुमहोत्सवः वने अस्ति।’ अस्मिन् वाक्ये क्रियापदं किम्?

(क) अस्ति (ख) अद्य
(ग) वने (घ) पशुमहोत्सवः

(ii) 'अन्तः' इत्यस्य पदस्य विपर्ययः कः?

(क) मा (ख) बहिः

(ग) विना (घ) नूनम्

(iii) 'अस्मान्' इति पदस्य प्रयोगः केभ्यः अभवत् ?

(क) पशुभ्यः (ख) जनेभ्यः

(ग) वृक्षेभ्यः (घ) सिंहभ्यः

(iv) 'उपकुर्वन्ति' इति क्रियापदस्य कर्तृपदं किम्?

(क) सिंहाः (ख) पशवः

(ग) वृक्षाः (घ) मयूराः

ख. रचनात्मकं कार्यम्

प्र.2 मंजूषातः संवादे रिक्तस्थानानि पूरयत-

(5)

मंजूषातः - (मम , त्वं , अहं, तव , त्वं ,)

प्रियंवदा - शकुन्तले! ...1 किं करोषि?

शकुन्तला - प्रियंवदे! ...2 नृत्यामि, त्वं किं करोषि?

प्रियंवदा - शकुन्तले! अहं गायामि। किं3 ...न गायसि ?

शकुन्तला - प्रियंवदे! अहं न गायामि। अहं तु नृत्यामि।

प्रियंवदा - शकुन्तले! किं4माता नृत्यति।

शकुन्तला - आम्5माता अपि नृत्यति।

प्रियंवदा - साधु, आवां चलावः।

खण्ड ग व्याकरणम्

प्र.3 वर्ण वियोजनं कुरुत - (कोई -4)

(4)

(i) मयूराः = म् + अ + य् + --- + र् + ---

(ii) बालकः = ब् + आ + ल् + --- + ----- + अः

(iii) वर्णाः = व् + अ + र् + --- + ---

(iv) लघुः = ल् + --- + --- + उः

(v) गजः = -- + अ + ज् + ---

प्र.4 वर्ण संयोजनं कुरुत - (कोई -4)

(i) व् + अ + स् + त् + र् + अ + म्। =

(ii) न् + ऋ + त् + य् + अ + न् + त् + इ =

(iii) स् + अ + न् + त् + इ =

(iv) त् + अ + त् + र् + अ =

(v) ग् + अ + र् + ज् + अ + त् + अः =

5 वर्णानां उच्चारण स्थानानि नामानि लिखत

i " प् " अक्षरस्य उच्चारण स्थानम् अस्ति - (कण्ठयः / ओष्ठ्यः / तालव्यः)

ii " ल् " अक्षरस्य उच्चारण स्थानम् अस्ति - (तालव्यः / ओष्ठ्यः / दन्त्यः)

प्र.6 संख्यापदानि लिखत - (कोई -4)

(4)

(i) तत्रकन्दुकानि सन्ति। (3)

(ii).....चटकाः विहरन्ति।(5)

(iii)..... जनाः पठन्ति । (16)

(iv)..... मयूराः नृत्यन्ति ।(12)

(v)..... तालाः सन्ति।(24)

प्र.7 शब्दरूपाणि विकल्पेभ्यः चित्वा लिखत - (कोई -4)

(4)

(i) बालिका शब्दस्य द्वितीया एकवचनम् किम् रूपम् भविष्यति । (बालिकाभ्याम् / बालिके / बालिकाका)

(ii) बालिका शब्दस्य प्रथमा बहुवचनम् किम् रूपम् भविष्यति । (बालिकाः / बालिकया / बालिकाम्)

(ii) बालक शब्दस्य द्वितीया एकवचनम् किम् रूपम् भविष्यति । (बालकः / बालकेन / बालकम्)

(iv) बालक शब्दस्य तृतीया एकवचनम् किम् रूपम् भविष्यति । (बालकम् / बालकेन / बालकाभ्याम्)

(v) बालिका शब्दस्य तृतीया बहुवचनम् किम् रूपम् भविष्यति । (बालिकाः / बालिकाभ्यः / बालिकाभिः)

प्र.8 धातुरूपाणि विकल्पेभ्यः चित्वा लिखत- (कोई - 4)

(4)

(i) सरोवरे हंसाः । (चलति, चलतः, चलन्ति)

(ii) त्वं । (पठ, पठितम्, पठत)

(iii) किं यूयं क्रिकेट- विषये ? (पठसि, पठथ, पठथः)

(iv) बालिका दर्पणस्य निकटे । (चलिष्यति, चलिष्यतः, चलिष्यन्ति)

(v) राजा पत्रं । (अपठत्, अपठताम्, अपठन्)

खण्ड घ

प्र.9 अधोलिखितम् गद्यांशं पठित्वा उत्तराणि लिखत-

(5)

नमो नमः । मम नाम सन्दीपः अस्ति । अहं मम दिनचर्या वदामि । अहम् मम दिनचर्या वदामि । अहं सार्ध-पञ्चवादने सूर्य-नमस्कारं योगासनं च करोमि । सन्दीपः सार्ध-षड्वादने मम परिसरं स्वच्छं करोति । ततः पादोन-सप्तवादनेस्नानं करोमि । अहं सप्तवादने प्रार्थनां करोमि, गीतापाठं च करोमि । तदनन्तरं मातुः पितुः च चरणवन्दनं करोमि ।

I. एकपदेन उत्तरत

(i) सन्दीपः काम् वदति ?

(ii) कः नमो नमः वदति ?

II. पूर्ण वाक्येन उत्तरत

(i) सन्दीपः मातुः पितुः च किम् करोति ?

(ii) सन्दीपः सप्तवादने किम् करोति ?

III. भाषिक कार्यम् (भाषा सम्बन्धी कार्य)

(i) "सन्दीपः सार्ध-षड्वादने मम परिसरं स्वच्छं करोति ।" वाक्ये कर्तृपदं (कर्ता) किम् ?

(क) करोति (ख) स्वच्छं

(ग) सन्दीप (घ) परिसरं

(ii) अत्र अनुच्छेदे ' भानुः ' पदस्य पर्यायवाची पदं किम्?

(क) नमो नमः (ख) सन्दीपः

(ग) सूर्यः (घ) परिसरं

प्र.10 अधोलिखितम् पद्यांशं पठित्वा उत्तराणि लिखत-

(5)

धनकामना सुखवासना न च वञ्चना हृदये ।

ऊर्जस्वला वर्चस्वला अतिनिश्चला विजये ॥ शूरा वयम् ॥

जगदीश हे! परमेश हे ! सकलेश हे भगवन् ।

जयमङ्गलं परमोज्ज्वलं नो देहि परमात्मन् ॥ शूरा वयम् धीरा वयम् ॥

I. एकपदेन उत्तरत

(i) जगदीश हे ! परमेश हे ! इति प्रार्थनाम् के कुर्वन्ति ?

(ii) कः जयमङ्गलं परमोज्ज्वलं नो (हमें) देहि ?

II. पूर्ण वाक्येन उत्तरत

(i) अस्माकं हृदये किम् किम् न् सन्ति ?

(ii) अस्माकं विजये किम् किम् सन्ति ?

III. भाषिक कार्यम् (भाषा सम्बन्धी कार्य)

(i) पद्यांशे ' पराजये ' इति पदस्य विलोमपदं किम् ?

(क) गुणः (ख) विजये (ग) परमात्मन् (घ) निश्चलः

(ii) अत्र अनुच्छेदे ' सुखकामना ' पदस्य पर्यायवाची पदं किम् ?

धनकामना सुखवासना न च

(क) धनकामना (ख) सुखवासना। (ग) वञ्चना (घ) वर्चस्वला

प्र.11 मञ्जूषातः प्रश्नवाचकानि पदानि लिखन्तु।

(5)

मञ्जूषा [के , काः , का , कानि , के]

(i) एताः ? (ii) ते लिखन्ति ?

(iii) एषा बालिका पठति ? (iv) ते महिले स्तः ?

(v) फलानि मधुराणि सन्ति ?

प्र.12 श्लोकम् पठित्वा मञ्जूषातः पदं चित्वा अन्वय-रिक्तस्थानानि पूरयत-

(4)

धनकामना सुखवासना न च वञ्चना हृदये ।

ऊर्जस्वला वर्चस्वला अतिनिश्चला विजये ॥ शूरा वयम् ॥

अन्वयः = अस्माकं ---1--- न धनकामना न ---2--- न च वञ्चना अस्ति । अस्माकं ---3--- (सदा) ऊर्जस्वला , वर्चस्वला , अतिनिश्चला च अस्ति ॥ वयम् ---4--- स्मः ।

मञ्जूषाः - [विजये , सुखवासना , शूराः , हृदये ,]

प्र. 13 मञ्जूषातः कर्तृपदानुसारं क्रियापदं चित्वा रिक्तस्थानानि पूरयत- (कोई -3)

(3)

(गायतः , लिखन्ति , पश्यन्ति , विहरतः)

(क) चटके ।

(ख) बालिके ।

(ग) छात्राः ।

(घ) जनाः ।

प्र. 14 उचितेन पदेन सह सर्वनामपदानि योजयत । (कोई -3)

(3)

(i) सिंहः क, तत्

(ii) पुस्तकम् ख. एतानि ।

(iii) पुस्तकानि ग. सा ।

(iv) बालिका घ. एषः ।

MID TERM

MID TERM



Session: 2024-25

MID TERM

SAMPLE PAPER

SUBJECT: German
CLASS: VI

MAX. MARKS: 60
DURATION: 2 ½ Hr.

General Instructions:

- Read all the questions carefully.
- Marks are indicated against every question.
- This paper is divided into 4 Sections
- Marks are indicated against each question.

SECTION-A LESEN(Reading)

(10 Marks)

1. Lesen Sie die Text und markieren Sie die Richtige Antwort.

(1X5=5 Marks)

Mein Name ist Maria. Ich bin 30 Jahre alt. Zu meiner Familie gehören außer mir noch drei weitere Personen. Mein Mann Markus ist 31 Jahre alt. Wir haben zwei Kinder. Unser Sohn Heinrich ist drei Jahre alt. Unsere Tochter Valerie ist ein Jahr alt. Wir haben auch einen Hund und zwei Katzen. Der Hund heißt Maya und die Katzen Lana und Micki.

Wir wohnen in einem Dorf. Die Stadt ist nicht weit von uns entfernt. Unser Haus ist klein und hat einen Garten. Dort spielen die Kinder gerne.

Heinrich geht in den Kindergarten, und Valerie ist bei mir zu Hause. Meine Eltern leben im Ausland, aber die Eltern meines Mannes leben in der Nähe. Ich gehe sie mit den Kindern gerne besuchen. Oft passen sie auch auf die Kinder auf. Ich bin Journalistin und arbeite meistens von zu Hause aus. Mein Mann ist Koch und arbeitet oft am Wochenende oder abends

1. Wie viele Kinder hat Maria mit Markus?

- a) Sie haben ein Kind.
- b) Sie haben zwei Kinder.
- c) Sie haben vier Kinder.
- d) Sie haben sechs Kinder.

2) Wer ist Heinrich?

- a) Heinrich ist Marias Mann.
- b) Heinrich ist Marias Nachbar.
- c) Heinrich ist Marias Sohn.

d) Heinrich ist Marias Vater.

3) Wo lebt Maria mit ihrer Familie?

- a) Sie leben in einem Haus in der Stadt.
- b) Sie leben in einer Wohnung in der Stadt.
- c) Sie leben in einem Haus im Dorf.
- d) Sie leben in einer Wohnung im Dorf.

4) Wo leben Marias Eltern?

- a) Sie leben im Ausland.
- b) Sie leben in der Nähe.
- c) Sie leben im gleichen Haus wie Maria.
- d) Sie leben in der Stadt.

5) Welche Berufe haben Maria und Markus?

- a) Maria ist Köchin und Markus ist Journalist.
- b) Maria ist Sekretärin und Markus ist Koch.
- c) Maria arbeitet nicht und Markus ist Elektriker.
- d) Maria ist Journalistin und Markus ist Koch.

2. Lesen Sie die folgende Text and Antwort:

(1X5=5 Marks)

Familie Meier

Das ist Familie Meier . Herr und Frau Meier sind verheiratet und haben zwei Töchter . Eine Tochter heisst Michaela und ist 14 . Die andere(other) Tochter heisst Melanie und ist 10 . Michaela und Melanie sind Schwestern . Die Meiers sind also vier Personen und sie haben auch einen Hund . Familie Meier wohnt in Graz . Das liegt in Österreich. Herr Meier ist Pilot, Frau Meier ist Lehrerin .Michaela ist schön und lustig ,aber Melanie ist streng. Ihr Vater ist sehr sportlich. Er spielt (plays) Golf und Tennis.Fragen -

Antwort:

1. Wieviele Personen sind Familie Meier zu Hause?
2. Wie viele Kinder haben Herr und Frau Meier und wie heissen sie ?
3. Wo wohnt Familie Meier ?
4. Was ist Herr Meier und Frau Meier von Beruf ?
5. Wie sind Michaela und Melanie ?

SECTION-B SCHREIBEN(Writing)

5 Marks

3.Schreiben Sie die Email an Petra .Antworte auf die Folgenden Frage

- Wie heisst du ? Wie alt bist du ?
- Wieviele Geschwister hast du ?
- Wieviele seid ihr zu Hause ?
- Wie sind deine Eltern ?

SECTION- GRAMMATIK (Grammar)

30 Marks

4. Ergänze die Verben "Sein"

(1X5=5 Marks)

- a. Wir _____ zu Hause aber ihr _____ in der Schule
- b. Das _____ meine Schwester Ankita
- c. Der Vater _____ in Berlin
- d. Monika und Rachael _____ meine beste Freundin.
- e. Meine Mutter _____ sehr schön

5. Der, die, das? Ergänze

(1X5=5 Marks)

- a. _____ Schokolade schmeckt sehr gut.
- b. _____ Buch ist sehr interessant
- c. _____ Mann ist intelligent
- d. _____ Kind ist lustig
- e. _____ Katze ist sehr süß

6. Wo and Woher oder Wohin?

(1X5=5 Marks)

- a. _____ Arbeitet er?
- b. _____ liegt in Berlin?
- c. _____ ist dein Buch
- d. _____ gehen wir?
- e. _____ kommst du?

7. Wer and Was? Ergänze

(1X5=5 Marks)

- a. _____ bist du?
- b. _____ ist dein Bruder?
- c. _____ hat Schokolade?
- d. _____ wohnt in Indien?
- e. _____ ist deine Nummer?

8. mein und dein Ergänze

(1x5=5 Marks)

- a. Ist das _____ Mutter (du)
- b. Das ist _____ Tochter (ich)
- c. Mario ist _____ beste Freunde? (ich)
- d. Habe ich _____ Kuli? (du)
- e. _____ Oma sind sehr alt. (ich)

9. Ergänze die Preposition von oder bei.

(1X5=5 Marks)

- a. Simrab ist die Mutter _____ Arvi.
- b. Wir sind _____ Eltern Haus.
- c. Richard wartet _____ dem Einkaufszentrum.
- d. Herr Frank ist die Großvater _____ Michael
- e. Kiyab ist _____ Apotheke.

SECTION-D LITRATUR (Literature)

15 Marks

10. Antworten die Folgenden Fragen:(Culture von Deutschland)

(1X7=7 Marks)

- a) _____ ist der Hauptstadt von Deutschland.
- b) _____ ist die Bundeskanzlerin von Deutschland.
- c) Die Währung von Deutschland ist _____
- d) Das Parlements gebäude von Deutschland heißt _____
- e) Die Deutsche Fahne hat drei Farben _____, _____, _____.

11.Satz Bilden:

(1X5=5Marks)

- 1. heiße - Stefan- ich
- 2. das – Eltern – von- Stefan – die -sind
- 3. hat – deine - Kinder – Tante – zwei -?
- 4. Schwester – ist – meine – faul
- 5. zu Hause – vier – wir – sind

12. Ergaenze bitte ein/eine/einen

(1X3=3 Marks)

- 1.Peter hat ____ Auto.
- 2.Frau Maier hat ____ Tochter
- 3.Susi hat ____ einen Bruder

NKBS



**N. K. BAGRODIA SECTOR-17, PHASE-II,
GLOBAL SCHOOL DWARKA, NEW DELHI-78**

G-mail: nkbglobalschool@gmail.com, Website: www.nkbglobalschool.com

Session: 2024-2025

Sample Paper-1

Subject: Spanish

Max.Marks: 60

Class: Vi

Duration : 2.5 hr

General Instructions:

This question paper consists of four sections

- Sección – A – Lectura
- Sección – B – Escritura
- Sección – C – Gramática
- Sección – D – Literatura

All questions are compulsory Read the questions carefully before answering.

Sección – A Lectura

Q1. Lee el texto y responde a las preguntas.

5

Esta es mi familia. Mi padre se llama Antonio y mi madre es Adela. Somos cuatro hermanos, dos hermanos y dos hermanas. Mis hermanas se llaman Carmen y Ana y mi hermano se llama Andrés. Yo soy José Luis y tengo dos hijos, Antonio y Pepe.

Mi hermano Andrés no está casado. Mi hermana Carmen tiene un hijo Paco y una hija Alicia. Mi hermana Ana tiene dos hijas se llaman Cristina y Lucia. Mis abuelos se llaman Javier y Elena.

Las preguntas.

- Q1. ¿Cuántos hermanos tiene José?
- Q2. ¿Cómo se llama el hermano de José?
- Q3. ¿Cuántos hijos tiene José?
- Q4. ¿Quién es Antonio?
- Q5. ¿Quién es Alicia?

Q2. Lee el texto y responde a las preguntas.

5

Antonia es de Inglaterra. Ella vive en Italia con su familia. Ella tiene doce años y estudia en una escuela 'Los Pequeños'. Su padre trabaja en una compañía de ordenadores y su madre enseña las matemáticas a unos estudiantes en casa. Ella tiene amigos de India, Estados Unidos y España. Ella habla italiano, español y el inglés con los amigos de la escuela. Ella estudia mucho y baila el flamenco también.

¿Escribe verdadero o falso?

- a) Antonio es italiana.
- b) Su padre no trabaja.
- c) Antonio habla tres lenguas.
- d) Ella tiene amigos alemanes.
- e) Antonia enseña las matemáticas a sus amigas.

Sección – B Escritura


Q3. Escribe diaria rutina sobre ti en 40 palabras.

5

0

Escribe lo que te gusta hacer y lo que no en 40 palabras.

Q4. Mira el dibujo del aula y escribe ¿Qué hay en la casa?



Sección – C Gramática

Q5. Ser vs Estar.

2.5

- 1. La clase de español..... a las diez y media de la tarde.
- 2. ¿Dónde Vosotros?
- 3. Gloriaen su habitación.
- 4. Mi vestidorojo y bonito.
- 5. Mi madre ocupada.

Q6. Completa con el verbo gustar. **2.5**

1. Los chicos les..... mas las ciencias.
2. no le chocolate.
3. me..... la leche con galletas.
4. oslos zumos?
5. ¿Te.....los videojuegos?

Q7. ¿Di que hora es? **2.5**

- a. 1:15 b. 09:45 c. 5:30 d. 2:00 e. 4:05

Q8. Completa con qué, ¿quién, o dónde? **1**

1. ¿.....viven tus padres?
2. ¿.....Comes en la cantina?

Q9. Escribe tres frases con las palabras que te damos. **3**

Q10. Completa con espacios con la forma correcta del verbo. **5**

1. Mi abuelo..... (vivir) en Barcelona.
2. ustedes (comer) las frutas.
3. Señor López..... (escribir) las cartas.
4. Ellos.....(terminar) los deberes.
5. Mis tíos..... (trabajar) en un hospital.
6. Ella (cantar) una canción.
7. Él..... (dibujar) una foto.
8. Chicos (estar) listo.
9. Laura (escuchar) la noticias.
10. los niños (dibujar) en la pizarra.

Q11. Completa las frases con la palabra adecuada. **2.5**

1. (my) _____ cuadernos son verdes.
2. (their) _____ padres son viejos.
3. (our) _____ cantina es grande.
4. (her) _____ padre es un doctor.
5. (your) _____ hijos son inteligentes.

Q12. Completa los espacios con los adjetivos demostrativos. **2**

- a. (These) monumentos son grandes.
- b. (This) es mi gato.
- c. (That) escuela es muy antiguo.
- d. (Those) estudiantes estudian mucho.

Q13. Ordena las frases en cada frase. **4**

- a. sois amigos vosotros

- b. están sorprendido Laura y maría.
- c. Ana y Mario hermanos de miguel son
- d. este despierto miguel

Q14. Subraya la palabra incorrecta. **5**

- a. Sol esta despierto.
- b. Miguel es una chica.
- c. vives tu?
- d. cual es tu numero de teléfono?
- e. ellos son en la casa.

Sección- D literatura

Q15. Responde a las preguntas.

- Q1. ¿Mario es hermano de sol? **1**
- Q2. ¿Es esto un sueño? **1**
- Q3. ¿Qué hora es? **1**
- Q4. ¿Qué asignatura le gusta a cesar? **1**
- Q5. ¿De dónde es paloma? **1**

Q16. ¿Qué les gusta desayunar? ¿Completa? **2**

- a. A sol le gusta la
- b. A todos les gusta el

Q17. Escribe las frases de España.



Session: 2024-25
MID TERM-MOCK EXAM

SUBJECT: MATHEMATICS
CLASS: VI


MAX. MARKS: 60
DURATION: 2 ½ Hr

General Instructions:

1. This Question Paper has 5 Sections A-E.
2. Section A has 12 MCQ's carrying 1 mark each.
3. Section B has 6 questions carrying 2 marks each.
4. Section C has 3 questions carrying 03 marks each.
5. Section D has 3 questions carrying 05 marks each.
6. Section E has 3 case based integrated units of assessment (04 marks) with subparts of the values of 1, 1 and 2 marks each respectively.
7. All Questions are compulsory. However, an internal choice in 1 question of 5 marks, 1 question of 3 marks and 2 questions of 2 marks has been provided. An internal choice has been provided in the 2 marks question of Section E.

SECTION A (1 × 12)

Q. No	Questions	Marks
Q1.	$3 \times 10000 + 0 \times 1000 + 8 \times 100 + 0 \times 10 + 7 \times 1$ is same as a) 30087 b) 30807 c) 3807 d) 3087	1
Q2.	Which of the following is not defined? a) $5 + 0$ b) $5 - 0$ c) 5×0 d) $5 \div 0$	1
Q3.	The number of factors of 36 is a) 6 b) 7 c) 8 d) 9	1
Q4.	Numbers having more than two factors are called _____ numbers.	1
Q5.	The product of the place values of two 2's in 428721 is a) 4 b) 40000 c) 400000 d) 40000000	1
Q6.	If 1 is added to the greatest 7-digit number, it will be equal to a) 10 thousand b) 1 lakh c) 10 lakh d) 1 crore	1
Q7.	The number of distinct prime factors of the largest 3-digit number is a) 2 b) 3 c) 5 d) 11	1
Q8.	The number of angles in the given figure is	1



- a) 3 b) 4 c) 5 d) 6

Q9. If sum of two angles is greater than 180° , then which of the following is not possible for the two angles? 1

- a) One obtuse angle and one acute angle
 b) One reflex angle and one acute angle
 c) Two obtuse angles
 d) Two right angles

Q10. The common part between the angles BAC and DAB in the given figure is _____ 1



Q11. How many line segments are there in the given figure? Name them. 1



Q12. Assertion (A) – When the time is 11 o'clock, the angle formed between the hour and the minute hand is an acute angle. 1

Reason (R) – Acute angles measure less than 90° .

- a) Both A and R are true and R is the correct explanation of A
 b) Both A and R are true but R is not the correct explanation of A
 c) A is true but R is false
 d) A is false but R is true

SECTION B (2 × 6)

Q13. Express the largest 4-digit number as product of primes. 2

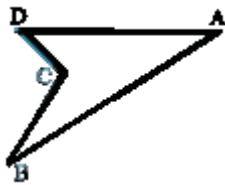
Q14. In a city, polio drops were given to 2,12,583 children on Sunday in March 2008 and to 2,16,813 children in the next month. Find the difference of the number of the children getting polio drops in the two months. 2

Q15. If $AC \perp BD$, then name all right angles in the given figure. 2



OR

Is ABCD a polygon? If yes, then why? What is the special name for it?



- Q16. The diameter of the Jupiter is 142800000 meters. Insert commas suitably and write the diameter according to the international System of Numeration. 2

OR

Radius of the Earth is 6400 km and that of Mars is 4300000 m. Whose radius is bigger and by how much?

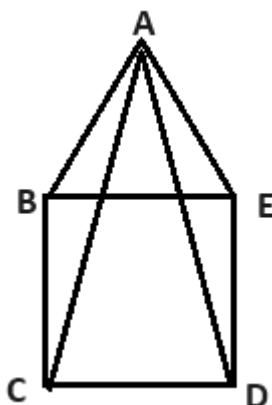
- Q17. Find the difference between the largest 7-digit and the smallest 8-digit number. 2
- Q18. Find the least number which when divided by 4, 5 and 6 leaves remainder 3. 2

SECTION C (3 × 3)

- Q19. A box contains 50 packets of biscuits each weighing 120 g. how many such boxes can be loaded in a van which cannot carry beyond 900 kg? 3
- Q20. Make the greatest and the smallest 5-digit numbers using different digits in which 5 appears at ten's place. And find the difference between them. 3
- Q21. Write the measure of smaller angle formed by the hour and minute hands of a clock at 7 O'clock. Also, write the measure of the other angle and also state what types of angles these are. 3

SECTION D (5 × 3)

- Q22. In the given figure, BCDE is a square and a 3D shape has been formed by joining the point A in space with the vertices B, C, D and E. 5



- i) Name the 3D shape.
- ii) Name all the vertices.
- iii) Name all the edges.
- iv) How many faces are there? Name all faces.

- Q23. a) Determine the sum of four numbers as given below: 3
- i) successor of 32
 - ii) predecessor of 49
 - iii) predecessor of the predecessor of 56
 - iv) successor of the successor of 67
- b) A person has Rs 1000000 with him. He purchased a colour T.V. for Rs 16580, a motor cycle for Rs 45 890 and a flat for Rs 870000. How much money was left with him? 2

OR

- a) Find the sum of the greatest and the least six digit numbers formed by the digits 2, 0, 7, 5.
 - b) Chinmay has Rs 610000. He gave Rs 87500 to Jyoti, Rs 126380 to Javed and Rs 350000 to John. How much money was left with him?
- Q24. a) Floor of a room measures 4.5 metres \times 3 metres. Find the minimum number of complete square marble slabs of equal size required to cover the entire floor. 3
- b) Test the divisibility by 11 for 108273. 2

SECTION E (4 \times 3)

- Q 25. In a 6 coach train, each coach has 50 seats for passengers. The first coach is reserved for women. Sixteen seats are reserved for women and senior citizens in each of the remaining coach.



- i) How many passenger seats are reserved in the metro train? 1
- ii) How many unreserved passenger seats are in the metro train? 1
- iii) On an average, a metro train completes 4 round trips of 90 kilometers in a day. What is the average distance travelled by the metro? 2

OR

What will be the distance covered by the metro train in 2 hours if the speed of it is 80 km/hr?

- Q 26. John, Rishi and Feroz participated in track events. During practice sessions, their coach observed that John took 48 seconds, Rishi took 72 seconds and Feroz took 108 seconds to run around a circular track. They start running at 6 am for half an hour.

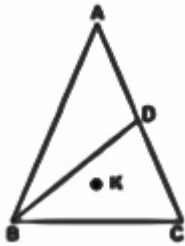


- i) How many seconds after 6 am will they come together? 1
ii) How many times will they all come together at same position? 1
iii) Write down the timings when they all come together at same position after 6 am. 2

OR

Find the HCF of 69, 117 and 171.

- Q 27. Look at the triangle given below.



- i) Mahesh claims, '**BD** is the common side for triangle **ABD** and triangle **BCD**'. Is he correct? Justify your answer. 1
ii) Name all the angles formed in the given figure. 2
OR
Name all the line segments formed in the given figure.
iii) Where does the point **K** lie? 1



**N. K. BAGRODIA SECTOR-17, PHASE-II,
GLOBAL SCHOOL DWARKA, NEW DELHI-78**

G-mail: nkbglobalschool@gmail.com, Website: www.nkbglobalschool.com

Session: 2024-25

MID TERM

Sample Paper

SUBJECT: SCIENCE

CLASS: VI

MAX. MARKS: 60

DURATION: 2.5 HR

General Instructions:

- Read all the questions carefully. All questions are compulsory
- The question paper has five sections A,B,C,D and E. There are 26 questions in the question paper.
- Section A- questions no 1 to 10 all questions and parts thereof are of one mark each .These questions contain multiple choice questions (MCQs), and assertion reason type questions.
- Section B- questions no 11 to 15 are very short answer type questions ,carrying two mark each. Answer to these questions should be in range of 30 to 50 words.
- Section C- question no 16 to 21 are short answer type questions ,carrying 3 marks each .Answer to these questions should be in the range of 80 to 120 words.
- Section D- question no- 21 to 24 are source based /case based questions carrying 3 marks each with sub parts.
- Section E- question no-25 to 26 are long answer type questions carrying 5 marks each. Answer to these questions should be in range of 80 to 120 words.
- There is no overall choice .However, internal choice have been provided in some questions. A Student has to attempt only one of the alternative in such questions.
- Wherever necessary , neat and properly labelled diagrams should be drawn.

Section– A(1X10=10)

1. Given below are the steps to test the presence of proteins in a food item. (1)
- i) Take a small quantity of a food item in a test tube add 10 drops of water to it and shake it.
 - ii) Make a paste or powder of food to be tested.
 - iii) Add 10 drops of caustic soda solution to the test tube and shake well.
 - iv) Add 2 drops of copper sulphate solution to it.
- Which of the following is the correct sequence of the steps?
- | | |
|-------------------|-------------------|
| a) i, ii, iv, iii | b) ii, i, iv, iii |
| c) ii, I, iii, iv | d)iv, ii, i, iii |
2. Which of the following is a lustrous material? (1)
- | | | | |
|--------------|-------------|---------------------|----------------------|
| a) Aluminium | b) Graphite | c) Both (a) and (b) | d) None of the above |
|--------------|-------------|---------------------|----------------------|
3. Which amongst the following method would be most appropriate to separate grains from bundle of stalks? (1)
- | | |
|----------------|--------------|
| a) Handpicking | b) Winnowing |
| c) Sieving | d) Threshing |

4. Read the following statements about diseases. (1)

- i) They are caused by germs.
- ii) They are caused due to lack of nutrients in our diet.
- iii) They can be passed on to another person through diet.
- iv) They can be prevented by taking a balanced diet.

Which pair of statements best describe deficiency disease.

- a) i and ii
- b) ii and iii
- c) ii and iv
- d) i and iii

5. Akshay's grandmother is suffering from diabetes. Her doctor advised her to take 'lassi' with less fat content .Which of the following method would be most appropriate for Akshay to prepare it. (1)

- a) Filtration
- b) Decantation
- c) Churning
- d) Winnowing

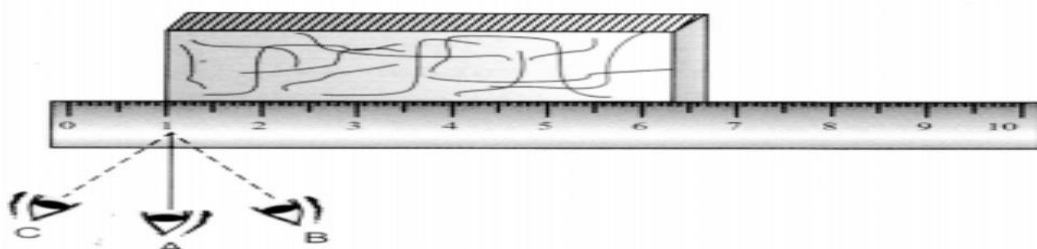
6. Salt is obtained from sea water by which process: (1)

- a) Evaporation
- b) Filtration
- c) Decantation
- d) Condensation

7. Butter is an example of..... substance. (1)

- a) Transparent
- b) Translucent
- c) Both (a) and (b)
- d) opaque

8. In the following figure the proper way of reading scale is: (1)



- a) C
- b) B
- c) A
- d) Anyway can be chosen

Directions Q-9 to 10 are Assertion Reason Type questions .Choose the correct answer from the options given below

- a) Assertion and Reason both are correct statements and reason is the correct explanation for assertion.
- b) Assertion and Reason both are correct statements and reason is the not the correct explanation for assertion.
- c) Assertion is the correct statement but reason is the wrong statement.
- d) Assertion is the wrong statement and reason is the correct statement.

9. Assertion: Plants are usually grouped into herbs , shrubs and trees. (1)

Reason: The plants are classified on the basis of their height , nature of stem and branches.

10 Assertion: The motion of a child on a swing is an example of periodic motion. (1)

Reason: Periodic motion is one that repeats itself after regular intervals of time.

Section-B (2X5=10)

11. Explain the Statement: Minerals and vitamins are needed in very small quantities by our body as compared to other components , yet, they are an important part of a balanced diet. (2)

12. On a bright sunny day, Shikha was playing hide and seek with her brother. She hid herself behind the glass door .Do you think he will be able to locate her? If yes,why? If no,why? (2)



- 13
- a) Name and describe briefly the method shown in the above picture. (1)
- b) What is the principle of this method? (1)

14. Manu's mother maintains a Kitchen garden. One day she was digging out radish from the soil .She told Manu that radish is a kind of root.

- a) What type of root radish is? (1)
- b) What type of venation would you observe in the leaves of radish plant? (1)

15. Suppose the distance between your school and home is 1.5 Km. Express it in metres. (2)

Section-C (3X6=18)

16. Neha often complained of bleeding gums. She also had a weak immune system , and her wounds took longer time to heal. The doctor prescribed her vitamins supplement and asked her to include certain food in her diet.

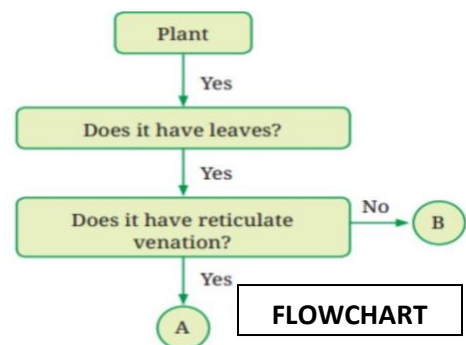
- a) Which deficiency disease could Neha be suffering from? (1.5)
- b) Name the vitamin that is lacking in her diet. (1.5)

17. X,Y and Z are three types of materials .The material X and Y can break into pieces easily when hit with object but Z does not break easily. X is used in the windows of bathroom ,whereas Y is used in the windows of our drawing room .The material Z is used in making doors and almirahs of our house.

- a) What do you think X could be? (1.5)
- b) What is the difference between X and Z. (1.5)

18. You are provided with a mixture of salt, sand, oil and water. Write the steps involved for separation of salt , (3)
sand and oil from the mixture along with the diagram.

- 19.
- a) Analyse the flowchart .What can be the examples of A and B. (1.5)
- b) Draw a well labelled diagram of leaf. (1.5)



20. Would it be convenient to use the unit metre to use the larger lengths , such as the length of a railway track between two cities or to measure smaller lengths such as the thickness of a page of a book. Explain (3)

21. Two types of seeds are shown in the picture



A



B

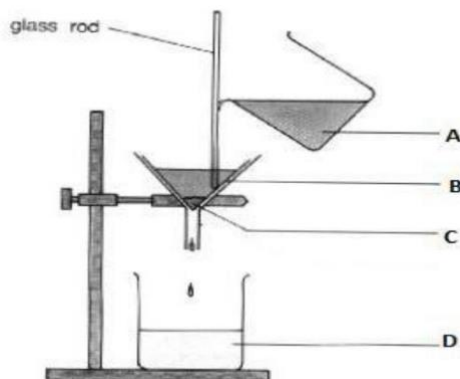
- a) Identify Seed (A) and Seed (B) (1)
- b) Write differences between type of roots and leaf venation found in them. (2)

Section-D (4X3=12)

22.



- a) Name the disease shown in the picture. (1)
 - b) What are its symptoms? (2)
 - c) Why does growing children need more minerals? (1)
23. Observe the method of separation shown in the picture and answer the question.



- a) Identify the process and label the parts marked. (1)
- b) Define the process. (2)
- c) Give one example from your daily life where you can use this method of separation. (1)

24. Observe the picture carefully and answer the questions:



- a) Name the animal shown in the picture (A) and (B). (1)
- b) How (B) is adapted to survive in the colder regions. (1)
- c) Write differences between (A) and (B). (2)

Section E (5X2=10)

25. It was Paheli's Birthday, her grandmother gave her two gifts made of metals, one old dull silver spoon and a pair of Lustrous gold earrings. She was surprised to see the differences in the appearance of two metal.


- a) Explain differences for this reason. (1)
- b) Which of them will conduct electricity? (2)
- c) Write any two properties of metal. (2)

Or

Nidhi and Ridhi decided to open a stationary store. They purchased a large number of materials from the market. Nidhi systematically arranged all the items based on the similarities and differences. The items were not arranged by Ridhi, she simply arranged them according to the available space in her shop.

- a) What is the purpose of grouping item? (2)
- b) Do you believe Nidhi and Ridhi will be able to easily locate items in their shop? why? (2)
- c) Assume you have a stationary shop how will you arrange your products in your store? (1)

26



- a) A roller coaster is made in the shape shown in figure above. A ball starts from point A and escapes through point F. Identify the types of motion of the ball on the rollercoaster and corresponding portions of the track (2.5)
- b) Give two examples of linear, circular and oscillatory motion. (2.5)

MID TERM



N. K. BAGRODIA SECTOR-17, PHASE-II,
GLOBAL SCHOOL DWARKA, NEW DELHI-78
G-mail: nkbglobalschool@gmail.com, Website: www.nkbglobalschool.com

Session: 2024-25

SAMPLE PAPER: MID TERM EXAM

SUBJECT: Social Science
CLASS: VI

MAX. MARKS: 60
DURATION: 2.5 Hr


General Instructions:

- Read all the questions carefully. All questions are compulsory.
- The question paper comprises four sections A, B, C, D, E and F. There are 30 questions in the question paper.
- **Section-A - question no. 1 to 16 - are of one mark each.** These questions contain multiple choice questions (MCQs), and assertion - reason type questions.
- **Section-B - question no. 17 to 20 are Very short answer type questions, carrying 2 marks each.** Answers to these questions should in the range of 30 to 50 words.
- **Section-C - question no. 20 to 24 are short answer type questions, carrying 3 marks each.** Answers to these questions should in the range of 50 to 80 words.
- **Section-D - question no. - 25 and 26 are long answer type questions carrying 5 marks each.**
- **Section-E - question no. - 27 to 29 are source-based/case-based questions carrying 4 marks each.**
- **Section-F - question 30 is a map question carrying 2 marks.**
- Internal choices have been provided in some questions. A student has to attempt only one of the alternatives in such questions.

SECTION-A

MULTIPLE CHOICE QUESTIONS (1x16= 16 marks)

1. Identify the image given below:



a) Cardinal Directions

- b) Subcardinal Directions
- c) Intermediate directions
- d) None of the above


2. Which of the following best describes what archaeologists might study to learn about early human life?

- a) Old newspapers
- b) Ancient rock art
- c) Modern city maps
- d) Recent photographs

3. India gained independence in the year 1947, which falls in which century?

- a) 19th century
- b) 20th century
- c) 21st century
- d) None of the above

4. The given image depicts a major episode from which famous epic?



- a) Mahabharata
- b) Panchatantra
- c) Ramayana
- d) Jataka Tales

5. Which of the following is incorrect about Panchatantra?

- a) It is a collection of stories written in Sanskrit.
- b). It includes animal characters to convey moral lessons.
- c) It is an epic with its origin from Arab countries

d) It has around 200 adaptations in more than 50 languages.

6. What is believed to be the first metal used to make durable tools by early humans?

- a) Bronze
- b) Iron
- c) Silver
- d) Copper

7. Which of the following map would you use to locate the State of Uttar Pradesh?

- a) Thematic map
- b) Political map
- c) Physical map
- d) World map

8. Which abbreviation stands for the Latin phrase 'in the year of the Lord'?

- a) BC
- b) CE
- c) BCE
- d) AD

9. Which of the following is used to measure the distance north or south of the Equator?

- a) Longitude
- b) Latitude
- c) Prime Meridian
- d) International Date Line

10. What do the rock paintings found in caves suggest about early humans?

- a) They were skilled architects
- b) They were talented musicians
- c) They had a sense of art and creativity
- d) They were expert mathematicians

11. Which festival marks the beginning of the harvest season in many parts of India?

- a) Christmas
- b) Holi
- c) Eid
- d) Makara Sankranti

12. If you are traveling eastward by ship and cross the International Date Line (IDL) on a Monday morning, what day will it be after crossing the IDL?

- a) Monday
- b) Sunday
- c) Tuesday
- d) Saturday

13. **Assertion (A):** In the 17th century, the Indian chintz became popular in Europe.

Reason (R): England and France banned the import of chintz from India.

- a) Both A and R are true, and R is the correct explanation of A.
- b) Both A and R are true, but R is not the correct explanation of A.
- c) A is true, but R is false.
- d) A is false, but R is true.

14. **Assertion (A):** Early human communities often settled near rivers after the last Ice Age.

Reason (R): Rivers provided a source of water for drinking and bathing.

- a) Both A and R are true, and R is the correct explanation of A.
- b) Both A and R are true, but R is not the correct explanation of A.
- c) A is true, but R is false.
- d) A is false, but R is true.

15. **Assertion (A):** The lines that separate time zones are fully straight lines.

Reason (R): This is because they follow international borders and respect each country's standard time.

- a) Both A and R are true, and R is the correct explanation of A.
- b) Both A and R are true, but R is not the correct explanation of A.
- c) A is true, but R is false.
- d) A is false, but R is true.

16. **Assertion (A):** 82°30'E is selected as the Standard Meridian of India.

Reason (R): It passes through Uttar Pradesh and it is exactly 5 hours ahead of GMT.

- a) Both A and R are true, and R is the correct explanation of A.

- b) Both A and R are true, but R is not the correct explanation of A.
- c) A is true, but R is false.
- d) A is false, but R is true.

SECTION-B

VERY SHORT ANSWER QUESTION (2x4= 8 marks)

17. What is an epic? Name any two famous epics of India.
18. Describe the climate near the Equator and how it changes as you move towards the poles.

OR

Why is it necessary to have standard time?

19. If it is 4:00 pm at the 30°E longitude, what would be the local time at:
- a) Cairo (GMT+2)
 - b) New York (GMT-5)
20. Match the following with their correct pairs:

COLUMN 1	COLUMN 2
1. Geologist	i. Study the material remains of the past through excavation and exploration
2. Epigraphist	ii. Study the physical features of the Earth
3. Palaeontologist	iii. Study the writings on inscriptions
4. Anthropologist	iv. Study human societies and cultures from oldest times to the present
	v. Study the fossils of animals and plants

SECTION-C

SHORT ANSWER QUESTIONS (3x4=12 marks)

21. In the last 50 years or so, scientific studies have been contributing more and more to the reconstruction of the past. Explain how the new sources of history changed the way historians reconstruct the past?

22. India is a country of many diversities, yet it is united as one nation. Do you agree with the statement? If yes, explain your answer.

23. Mention some tribal communities in India that have their own versions of the Ramayana and the Mahabharata. How do these communities connect their history with the epics and preserve them?

24. Differentiate between the parallels of latitude and meridians of longitude.


OR

Differentiate between local time and standard time.

SECTION- D

LONG ANSWER QUESTIONS (5x2=10 marks)

25. Interpret the image given below and describe the various aspects of lives of the early humans.



OR

The last Ice Age lasted from over 100,000 (one lakh) years ago to around 12,000 years ago. Discuss how the end of the ice age changed the lives of the early humans.

26. Write a short note on any two of the following.

(2.5 x 2.5= 5 marks)

a) Equator

- b) Prime Meridian
- c) International Date Line

SECTION-E

SOURCE BASED QUESTIONS (4x3=12 marks)

27. When historians study, say, a king or queen of 1,500 years ago, an ancient monument, a war or some items of trade, they take great care to gather information from as many sources as they can find and consult. Sometimes, the sources confirm each other (the jigsaw pieces match); at other times, sources may give contradictory information (the jigsaw pieces don't match), in which case they need to decide which source they can trust more.

- a) Who are the historians? (1)
- b) State any two sources that historians use to study recent past. (1)
- c) Imagine you are a historian. Discuss the various sources that you would use to understand the daily life of past civilizations? (2)

28. Every region and community in India has developed its own styles of clothing and dresses. Yet, we notice a commonality in some traditional Indian dresses, irrespective of the Exploring Society: India and Beyond Our Cultural Heritage and Knowledge Traditions material used. An obvious example is the plain length of cloth called the sari, a type of clothing worn in most parts of India and made from different fabrics — mostly cotton or silk, but nowadays synthetic fabrics too. Banarasi, Kanjivaram, Paithani, Patan Patola, Muga or Mysore are some of the famous types of silk saris. There are many more kinds of cotton saris.

- A) Which of the following is not a type of silk sari? (1)
 - a) Banarasi
 - b) Kanjivaram
 - c) Chanderi
 - d) Khadi
- B) What is true about the designs on saris? (1)
 - a) All designs are printed after weaving
 - b) All designs are part of the cloth
 - c) Some designs are part of the cloth, while others are printed after weaving
 - d) There are no designs on saris

C) List any four ways that women have put the sari to use beyond that of a dress. (2)

29. Symbols are another important component of maps. Our map has small drawings of actual buildings and a few other elements, but there would not be enough space on the map of a large city or a country to draw them all. Instead, a symbol is used to represent these features — symbols for different kinds of buildings (for instance a railway station, a school, a post office), for roads and railway lines, and for natural elements such as a river, a pond or a forest. In that way, numerous details can be shown in the limited space available on a map.

1. Identify the symbol shown in the image given below. (1)



- a) Railway station
- b) Bridge
- c) unmetalled road
- d) International Boundary

2. What are the other components of a map? (1.5)

3. What is the purpose of using symbols on a map? (1.5)

SECTION-F

MAP QUESTIONS (1x2=2 marks)

30. Identify and mark the following places on an outline map of India.

- a) Lohri marks the beginning of the harvest season in which state of India.
- b) The latitude which passes through India and divides it into two climatic zones.

NAME: _____

CLASS AND SECTION: _____

